



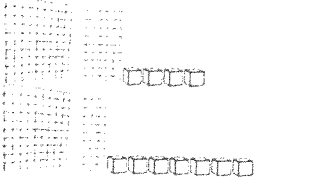





Name:

Weekly Homework Sheet (2)

Date:

Monday	Tuesday	Wednesday	Thursday
What is the place value of the underlined digit? $\underline{3},824$	What is the place value of the underlined digit? $3,8\underline{2}4$	What is the place value of the underlined digit? $3,82\underline{4}$	What is the place value of the underlined digit? $3,\underline{8}24$
Write the number in expanded form. 742	Write the number in expanded form. 690	Write the number in expanded form. 403	Write the number in expanded form. 579
Order the numbers from GREATEST to LEAST. $834 \quad 298 \quad 348$	Circle all the ODD numbers. $7 \quad 14 \quad 54 \quad 33 \quad 90 \quad 45$	Order the numbers from LEAST to GREATEST. $473 \quad 481 \quad 437$	Circle all the EVEN numbers. $9 \quad 16 \quad 72 \quad 55 \quad 70 \quad 25$
Write 5 equations where the difference is equal to 3. 1. 2. 3. 4. 5.	Find the sum. $8+1=$ $7+5=$ $9+8=$ $4+6=$ $2+9=$ $7+4=$ $6+7=$ $9+6=$	Write 5 equations where the sum is equal to 20. 1. 2. 3. 4. 5.	Find the difference. $8-7=$ $6-4=$ $9-3=$ $13-7=$ $16-5=$ $18-9=$ $12-8=$ $11-6=$
Round each number to the nearest 10. 87 _____ 43 _____ 755 _____ 897 _____ 304 _____	Round each number to the nearest 10. 97 _____ 44 _____ 755 _____ 273 _____ 495 _____	Round each number to the nearest 10. 997 _____ 485 _____ 614 _____ 321 _____ 572 _____	Round each number to the nearest 10. 54 _____ 95 _____ 7 _____ 236 _____ 465 _____
Is 167 closer to 100 or 200?  Is 341 closer to 300 or 400? 	Round 439 to the nearest hundred.  Round 681 to the nearest hundred. 	Round each number to the nearest 100. 672 _____ 250 _____ 378 _____ 129 _____ 67 _____	Round each number to the nearest 100. 443 _____ 956 _____ 349 _____ 258 _____ 609 _____
Find the sum. 	Use the place value strategy to find the sum. $\begin{array}{r} 357 \\ + 164 \\ \hline \end{array}$	Use the place value strategy to find the sum. $\begin{array}{r} 504 \\ + 836 \\ \hline \end{array}$	Use a number line to solve $235 + 123$ 
Find the difference. 	Use the place value strategy to find the difference. $\begin{array}{r} 427 \\ - 243 \\ \hline \end{array}$	Use the place value strategy to find the difference. $\begin{array}{r} 607 \\ - 324 \\ \hline \end{array}$	Use a number line to solve $245 - 137$. 

Spelling Contract HW Sheet

Monday	Tuesday	Wednesday	Thursday
<p>Circle the vowel(s) from each word</p> <p style="text-align: center;">cro<u>o</u>p</p>	<p>Choose 10(more difficult) words and write them 3 times each.</p> <p style="text-align: center;">plan plan plan</p>	<p>Use each word in a complete sentence</p> <p>I can smell the pizza baking in the oven.</p>	<p>Pretest</p> <p>* have an adult give you a pretest.</p>

Week # 2		Spelling Focus: Long Vowel Sounds	
1 spoke	10 ripe		
2 mile	11 broke		
3 save	12 skate		
4 excuse	13 life		
5 cone	14 done		
6 invite	15 these		
7 cube	16 those		
8 price	17 surprise		
9 erase	18 decide		

Name:

Weekly Homework Sheet (3)

Date:

Monday	Tuesday	Wednesday	Thursday
What is the place value of the underlined digit? 8, <u>4</u> 67	What is the place value of the underlined digit? 1,4 <u>3</u> 7	What is the place value of the underlined digit? <u>2</u> ,327	What is the place value of the underlined digit? 9,7 <u>4</u> 3
Order the numbers from GREATEST to LEAST. 264 642 426	Circle all the ODD numbers. 87 43 9 16 170 241	Order the numbers from LEAST to GREATEST. 434 433 344	Circle all the EVEN numbers. 87 43 9 16 170 241
Write 5 equations where the difference is equal to 2. 1. 2. 3. 4. 5.	Find the missing addend. 1. $10 + \underline{\quad} = 18$ 2. $7 + \underline{\quad} = 15$ 3. $\underline{\quad} + 13 = 19$ 4. $8 + \underline{\quad} = 16$ 5. $\underline{\quad} + 9 = 17$	Write 5 equations where the sum is equal to 13. 1. 2. 3. 4. 5.	Find the missing addend. 1. $13 - \underline{\quad} = 10$ 2. $9 - \underline{\quad} = 2$ 3. $11 - \underline{\quad} = 5$ 4. $15 - \underline{\quad} = 7$ 5. $9 - \underline{\quad} = 1$
Round each number to the nearest 10. 48 _____ 372 _____ 54 _____ 937 _____ 565 _____	Round each number to the nearest 10. 438 _____ 271 _____ 307 _____ 811 _____ 235 _____	Round each number to the nearest 10. 63 _____ 941 _____ 745 _____ 739 _____ 304 _____	Round each number to the nearest 10. 28 _____ 97 _____ 202 _____ 795 _____ 376 _____
Round each number to the nearest 100. 372 _____ 428 _____ 348 _____ 917 _____ 52 _____	Round each number to the nearest 100. 982 _____ 430 _____ 572 _____ 318 _____ 393 _____	Round each number to the nearest 100. 284 _____ 145 _____ 899 _____ 32 _____ 212 _____	Round each number to the nearest 100. 284 _____ 410 _____ 593 _____ 450 _____ 261 _____
Find the Sum. $\begin{array}{r} 697 \\ + 628 \\ \hline \end{array}$	Find the Sum. $\begin{array}{r} 775 \\ + 548 \\ \hline \end{array}$	Find the Sum. $\begin{array}{r} 585 \\ + 467 \\ \hline \end{array}$	Find the Sum. $\begin{array}{r} 879 \\ + 758 \\ \hline \end{array}$
Find the Difference. $\begin{array}{r} 301 \\ - 134 \\ \hline \end{array}$	Find the Difference. $\begin{array}{r} 804 \\ - 346 \\ \hline \end{array}$	Find the Difference. $\begin{array}{r} 902 \\ - 557 \\ \hline \end{array}$	Find the Difference. $\begin{array}{r} 703 \\ - 278 \\ \hline \end{array}$

Spelling Contract HW Sheet

Monday	Tuesday	Wednesday	Thursday
Circle the vowel(s) from each word crop	Choose 10(more difficult) words and write them 3 times each. plan plan plan	Use each word in a complete sentence I can smell the pizza baking in the oven.	Pretest * have an adult give you a pretest.

Week # 3

Spelling Focus: Long a/e Sounds

1 lay

10 chain

2 real

11 leave

3 trail

12 weigh

4 sweet

13 eight

5 today

14 neighbor

6 dream

15 paint

7 seem

16 please

8 always

17 yesterday

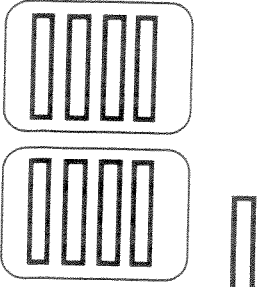
9 treat

18 explain

Name:

Weekly Homework Sheet (4)

Date:

Monday	Tuesday	Wednesday	Thursday
Order the numbers from GREATEST to LEAST. 734 1,156 499	Circle all the ODD numbers. 21 34 67 120 78 87	Order the numbers from LEAST to GREATEST. 628 863 266	Circle all the EVEN numbers. 32 54 45 145 90 48
What is the place value of the underlined digit? 4, <u>3</u> 89	What is the place value of the underlined digit? 7, <u>2</u> 95	What is the place value of the underlined digit? 1, <u>8</u> 40	What is the place value of the underlined digit? 4, <u>8</u> 39
Estimate the sum of 487 and 310.	Estimate the sum of 196 and 482.	Estimate the sum of 703 and 620.	Estimate the sum of 279 and 217.
Round each number to the nearest 10. 62 _____ 533 _____ 86 _____	Round each number to the nearest 10. 338 _____ 831 _____ 798 _____	Round each number to the nearest 10. 46 _____ 735 _____ 203 _____	Round each number to the nearest 10. 308 _____ 57 _____ 275 _____
Round each number to the nearest 100. 201 _____ 472 _____ 527 _____	Round each number to the nearest 100. 777 _____ 780 _____ 150 _____	Round each number to the nearest 100. 236 _____ 483 _____ 314 _____	Round each number to the nearest 100. 463 _____ 928 _____ 976 _____
Find the Sum. $\begin{array}{r} 384 \\ + 496 \\ \hline \end{array}$	Find the Sum of 536 and 232.	Find the Sum. $\begin{array}{r} 176 \\ + 988 \\ \hline \end{array}$	Find the Sum of 437 and 382.
Find the Difference. $\begin{array}{r} 726 \\ - 477 \\ \hline \end{array}$	Find the difference between 827 and 533.	Find the Difference. $\begin{array}{r} 800 \\ - 326 \\ \hline \end{array}$	Find the difference between 304 and 217.
Find the missing addend. $82 + \underline{\quad} = 123$	Find the missing addend. $\underline{\quad} + 74 = 137$	Find the missing addend. $88 + \underline{\quad} = 104$	Find the missing addend. $48 + \underline{\quad} = 162$
Solve $2 \times 40 = \underline{\quad}$ 	Draw a picture that represents $3 \times 50 = 150$	Solve 5×30 . Draw a picture.	Solve 4×20 . Draw a picture.

Spelling Contract HW Sheet



Monday	Tuesday	Wednesday	Thursday
<p>Circle the vowel(s) from each word</p> <p style="text-align: center;">cro<u>o</u>p</p>	<p>Choose 10 (more difficult) words and write them 3 times each.</p> <p style="text-align: center;">plan plan plan</p>	<p>Use each word in a complete sentence</p> <p style="text-align: center;">I can smell the pizza baking in the oven.</p>	<p>Pretest</p> <p>* have an adult give you a pretest.</p>

Week # 4		Spelling Focus: Long o Sounds	
1 load	10 sold		
2 open	11 window		
3 told	12 coach		
4 yellow	13 sew		
5 soak	14 though		
6 shadow	15 cold		
7 foam	16 most		
8 follow	17 tomorrow		
9 glow	18 clothes		

Name:

Weekly Homework Sheet (5)

Date:

Monday	Tuesday	Wednesday	Thursday
Order the numbers from GREATEST to LEAST. 332 233 323	Circle all the ODD numbers. 87 24 54 83 99 38	Order the numbers from LEAST to GREATEST. 728 826 688	Circle all the EVEN numbers. 78 25 14 77 83 70
Round each number to the nearest 10. 75 _____ 283 _____ 199 _____	Round each number to the nearest 100. 128 _____ 976 _____ 553 _____	Round each number to the nearest 10. 66 _____ 365 _____ 439 _____	Round each number to the nearest 100. 834 _____ 719 _____ 662 _____
Find the Sum. $\begin{array}{r} 249 \\ + 548 \\ \hline \end{array}$	Estimate the Sum of 299 and 388.	Find the Sum. $\begin{array}{r} 190 \\ + 768 \\ \hline \end{array}$	Find the Sum of 914 and 878.
Find the Difference. $\begin{array}{r} 825 \\ - 385 \\ \hline \end{array}$	Estimate the difference between 206 and 167.	Find the Difference. $\begin{array}{r} 701 \\ - 413 \\ \hline \end{array}$	Find the difference between 783 and 366.
Find the missing addend. $78 + \underline{\quad} = 99$	Find the missing addend. $\underline{\quad} + 64 = 177$	Find the missing addend. $98 + \underline{\quad} = 223$	Find the missing addend. $\underline{\quad} + 79 = 154$
Solve 5×30 . Draw a model to show your answer.	Solve 3×40 . Draw a model to show your answer.	Solve 7×20 . Draw a model to show your answer.	Solve 6×10 . Draw a model to show your answer.
Solve. $4+4+4=$ $2+2+2+2+2=$ $7+7+7+7=$ $3+3=$ $9+9+9+9=$	What multiplication problem is being modeled by this array? 	Draw an array for 4×2 .	Solve 5×4 using repeated addition.
Fill in the blanks. _____ groups of _____ 	Draw an array for 3×5	Draw two arrays that represent 12.	Solve 8×3 using repeated addition.

Spelling Contract HW Sheet

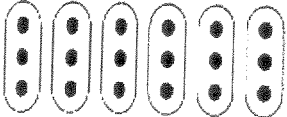
Monday	Tuesday	Wednesday	Thursday
<p>Circle the vowel(s) from each word</p> <p style="text-align: center;">cro<u>o</u>p</p>	<p>Choose 10 (more difficult) words and write them 3 times each.</p> <p style="text-align: center;">plan plan plan</p>	<p>Use each word in a complete sentence</p> <p style="text-align: center;">I can smell the pizza baking in the oven.</p>	<p>Pretest</p> <p>* have an adult give you a pretest.</p>

Week # 5		Spelling Focus: Long i Sounds	
1 bright	10 lie		
2 mild	11 tight		
3 sight	12 blind		
4 pie	13 fight		
5 shiny	14 die		
6 mind	15 find		
7 tie	16 night		
8 pilot	17 silent		
9 might	18 frightening		

Name:

Weekly Homework Sheet (6)

Date:

Monday	Tuesday	Wednesday	Thursday																																																
Write 486 in expanded form.	Circle all the ODD numbers. Underline all the EVEN numbers 122 343 728 910 423	What is the place value of the underlined number? 1, <u>3</u> 48 3, <u>7</u> 84	Order the numbers from LEAST to GREATEST. 873 399 548																																																
Round each number to the nearest 10 and 100. <table border="1" data-bbox="191 468 418 583"> <tr><td></td><td>10</td><td>100</td></tr> <tr><td>285</td><td></td><td></td></tr> <tr><td>637</td><td></td><td></td></tr> <tr><td>291</td><td></td><td></td></tr> </table>		10	100	285			637			291			Round each number to the nearest 10 and 100. <table border="1" data-bbox="532 478 760 594"> <tr><td></td><td>10</td><td>100</td></tr> <tr><td>328</td><td></td><td></td></tr> <tr><td>593</td><td></td><td></td></tr> <tr><td>385</td><td></td><td></td></tr> </table>		10	100	328			593			385			Round each number to the nearest 10 and 100. <table border="1" data-bbox="881 489 1109 604"> <tr><td></td><td>10</td><td>100</td></tr> <tr><td>444</td><td></td><td></td></tr> <tr><td>199</td><td></td><td></td></tr> <tr><td>243</td><td></td><td></td></tr> </table>		10	100	444			199			243			Round each number to the nearest 10 and 100. <table border="1" data-bbox="1230 489 1466 604"> <tr><td></td><td>10</td><td>100</td></tr> <tr><td>798</td><td></td><td></td></tr> <tr><td>953</td><td></td><td></td></tr> <tr><td>574</td><td></td><td></td></tr> </table>		10	100	798			953			574		
	10	100																																																	
285																																																			
637																																																			
291																																																			
	10	100																																																	
328																																																			
593																																																			
385																																																			
	10	100																																																	
444																																																			
199																																																			
243																																																			
	10	100																																																	
798																																																			
953																																																			
574																																																			
Find the Sum of 914 and 878.	Sandra had 314 stickers in her sticker collection. Jessie had 428 stickers. How many stickers did they have all together?	Find the Sum. $\begin{array}{r} 190 \\ + 768 \\ \hline \end{array}$	There are 232 pieces of candy in the bucket. If Ms. Davidson adds 84 more pieces of candy, how many pieces of candy are now in the bucket?																																																
There are 164 chairs in the library. If the librarian removes 74 chairs, how many chairs are there now?	Find the difference between 783 and 366.	Jessica made 120 cookies for her girl scouts meeting. She left 32 cookies at home for her brothers and sisters and brought the rest to the meeting. How many cookies did she bring to the meeting?	Find the Difference. $\begin{array}{r} 701 \\ - 413 \\ \hline \end{array}$																																																
Find the missing addend. $21 + \underline{\quad} = 99$	Find the missing addend. $\underline{\quad} + 113 = 177$	Find the missing addend. $125 + \underline{\quad} = 223$	Find the missing addend. $\underline{\quad} + 75 = 154$																																																
Find the product of 4×5 . Draw a picture to show your answer.	Mr. Ruff has 6 baskets of tennis balls. Each basket contains 11 balls. How many tennis balls does Mr. Ruff have?	Find the product of 8×3 . Draw a picture to show your answer.	The cafeteria will serve 7 tables of students. There are 8 students at each table. How many students will the cafeteria serve in all?																																																
Solve $0 \times 1 =$ $2 \times 0 =$ $0 \times 10 =$ $4 \times 0 =$ $8 \times 0 =$ $7 \times 0 =$ $0 \times 12 =$	Solve $1 \times 1 =$ $5 \times 1 =$ $1 \times 9 =$ $8 \times 1 =$ $7 \times 1 =$ $10 \times 1 =$ $1 \times 6 =$	Solve $2 \times 5 =$ $2 \times 8 =$ $2 \times 10 =$ $7 \times 2 =$ $6 \times 2 =$ $12 \times 2 =$ $2 \times 9 =$	Solve $3 \times 5 =$ $8 \times 3 =$ $3 \times 12 =$ $9 \times 3 =$ $6 \times 3 =$ $10 \times 3 =$ $3 \times 7 =$																																																
Fill in the blanks. $18 \div 6 = \underline{\quad}$ 	Write the fact family for the numbers 15, 5, and 3. 1. 2. 3. 4.	Draw a picture to solve. $12 \div 3 = \underline{\quad}$	Draw a picture to solve. $24 \div 4 = \underline{\quad}$																																																

Spelling Contract HW Sheet

Monday	Tuesday	Wednesday	Thursday
<p>Circle the vowel(s) from each word</p> <p style="text-align: center;">cro<u>o</u>p</p>	<p>Choose 10 (more difficult) words and write them 3 times each.</p> <p style="text-align: center;">plan plan plan</p>	<p>Use each word in a complete sentence</p> <p style="text-align: center;">I can smell the pizza baking in the oven.</p>	<p>Pretest</p> <p>* have an adult give you a pretest.</p>

Week # 6	Spelling Focus: Short & Long Vowel Sounds		
1 math	10 thick		
2 toast	11 elbow		
3 flame	12 huge		
4 easy	13 program		
5 socks	14 shell		
6 Friday	15 each		
7 stuff	16 both		
8 paid	17 comb		
9 cheese	18 holiday		